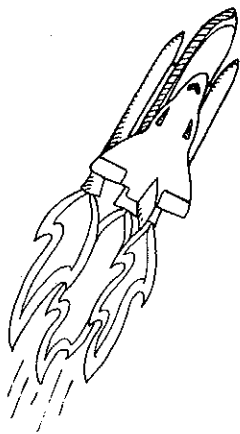



Identifying Newton's Laws

For each illustration, describe how the given laws affect the object's motion.




1 First Law of Motion: _____

2 Third Law of Motion: _____



3 Second Law of Motion: _____

4 Third Law of Motion: _____



5 First Law of Motion: _____

6 Second Law of Motion: _____
